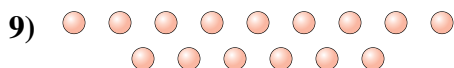
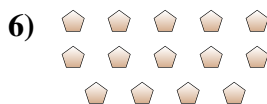

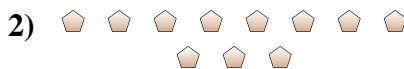




Determine if the number of shapes is even or odd.



Answers

1. _____

2. _____

3. _____

4. _____

5. _____

6. _____

7. _____

8. _____

9. _____

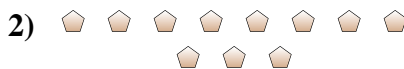
10. _____



Determine if the number of shapes is even or odd.




6



11



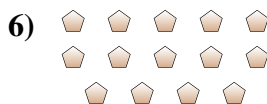
7



20



17



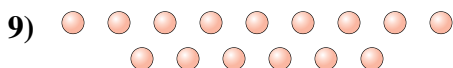
14



18



7



15



13

Answers

1. even

2. odd

3. odd

4. even

5. odd

6. even

7. even

8. odd

9. odd

10. odd